

**CHAPTER 8**  
**REINFORCEMENT**

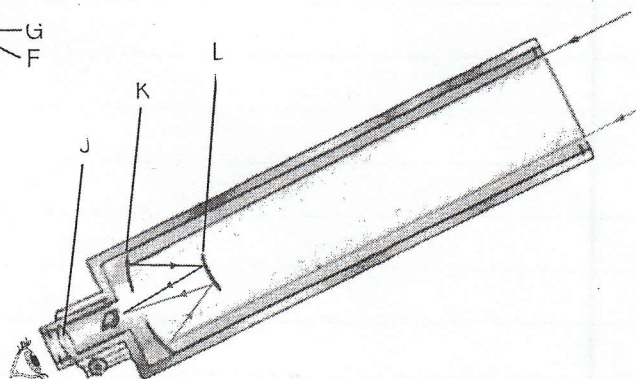
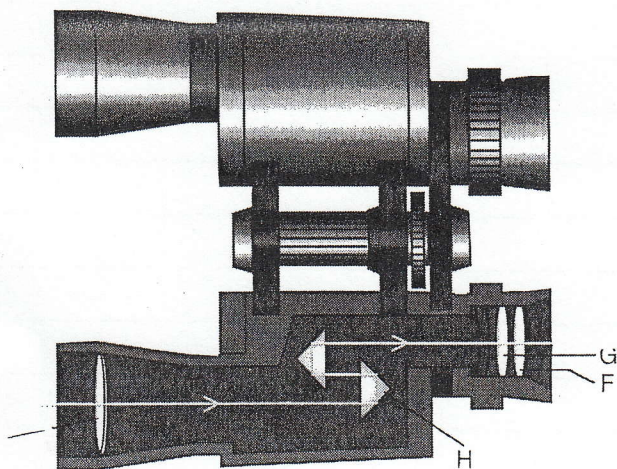
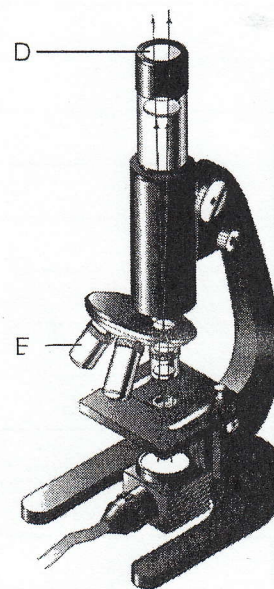

BLM 8-16

# Making Things Bigger

**Goal** • Label these diagrams to show your knowledge about mirrors, lenses, and prisms used in light technologies.

## What to Do

- Label the lenses and mirrors on these diagrams as concave, plane, or convex, and the prisms as triangular or rectangular. Record your answers in the space at the bottom of the page.



A _____	B _____	C _____
D _____	E _____	F _____
G _____	H _____	I _____
J _____	K _____	L _____